



INDIAN SCHOOL IBRA
ACADEMIC SESSION 2020-2021
Subject: Mathematics

Name: _____

Class/Sec: I/____

Date: _____

Topic: Revision worksheet – Numbers up to 20

1. Count and write the number name.

The rainbow has _____ colours.




2. Write the number that comes before, after and between.

a) _____ , 16

b) 19 , _____

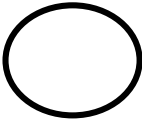



c) 10 , _____ , 12

3. Fill in the missing numbers.






12, _____, 14, _____, 16, _____, 18, _____

4. Fill the circle with $>$, $<$ or $=$ sign.

11  10	17  20
16  16	8  18

5. Arrange the numbers in ascending order (smallest to the greatest number).

[16, 20, 12]



6. Arrange the numbers in descending order (greatest to the smallest number).

[17, 14, 18]

