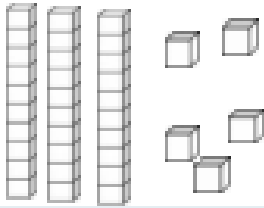
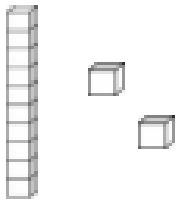


INDIAN SCHOOL IBRA
ACADEMIC SESSION 2020-2021
CLASS: I B – MATHEMATICS – 24.04.2020

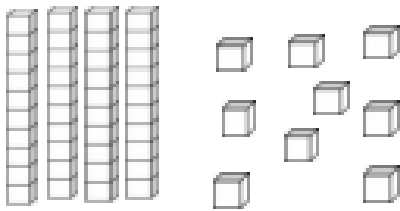
2. Find the total number of blocks.



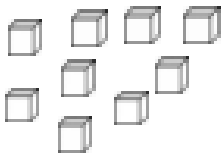
$$= \underline{3} \text{ tens} + \underline{5} \text{ ones} = \underline{35}$$



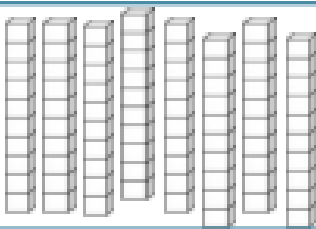
$$= \underline{\quad} \text{ tens} + \underline{\quad} \text{ ones} = \underline{\quad}$$



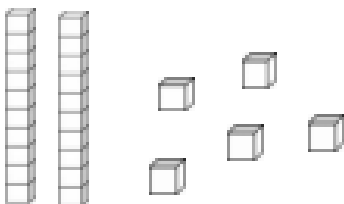
$$= \underline{\quad} \text{ tens} + \underline{\quad} \text{ ones} = \underline{\quad}$$



$$= \underline{\quad} \text{ tens} + \underline{\quad} \text{ ones} = \underline{\quad}$$



$$= \underline{\quad} \text{ tens} + \underline{\quad} \text{ ones} = \underline{\quad}$$



$$= \underline{\quad} \text{ tens} + \underline{\quad} \text{ ones} = \underline{\quad}$$